

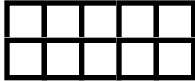

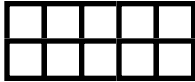
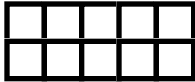







Name: _____

Period: _____

Date: _____

Activity 11: Out of Ten








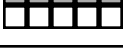
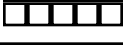


Complete each row using the information provided.

	Picture	What part of the rectangle is shaded?			
		In words	As a fraction	As a decimal	As a percent
(A)					80%
(B)					
(C)			$\frac{7}{10}$		
(D)				1.0	
(E)		nine out of ten			
(F)					20%
(G)			$\frac{4}{10}$		
(H)		five out of ten			
(I)				0.3	
(J)					
(K)		zero out of ten			

Activity 11: Out of Ten

Notes

Answer Key

	Picture	What part of the rectangle is shaded?			
		In words	As a fraction	As a decimal	As a percent
(A)		eight out of ten	$\frac{8}{10}$	0.8	80%
(B)		six out of ten	$\frac{6}{10}$	0.6	60%
(C)		seven out of ten	$\frac{7}{10}$	0.7	70%
(D)		ten out of ten	$\frac{10}{10}$	1.0	100%
(E)		nine out of ten	$\frac{9}{10}$	0.9	90%
(F)		two out of ten	$\frac{2}{10}$	0.2	20%
(G)		four out of ten	$\frac{4}{10}$	0.4	40%
(H)		five out of ten	$\frac{5}{10}$	0.5	50%
(I)		three out of ten	$\frac{3}{10}$	0.3	30%
(J)		one out of ten	$\frac{1}{10}$	0.1	10%
(K)		zero out of ten	$\frac{0}{10}$	0	0%