

Name: _____

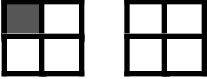
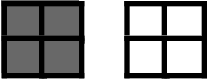

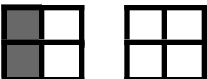



Period: _____

Date: _____

Activity 5: Out of Four

What part of the squares are shaded?

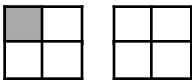
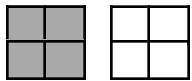
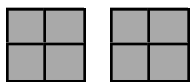
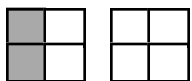
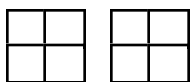
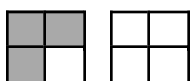
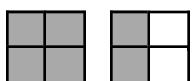
Write your answer in words, as a fraction, as a decimal, and as a percent.

	Picture	What part of the squares are shaded?			
		In words	As a fraction	As a decimal	As a percent
(A)		_____ out of four			
(B)		_____ out of _____			
(C)		_____ out of _____			
(D)		_____ out of _____			
(E)		_____ out of _____			
(F)		_____ out of _____			
(G)		_____ out of _____			

Activity 5: Out of Four

Notes

Answer Key

	Picture	What part of the squares are shaded?			
		In words	As a fraction	As a decimal	As a percent
(A)		One out of four	$\frac{1}{4}$	0.25	25%
(B)		Four out of four	$\frac{4}{4}$	1	100%
(C)		Eight out of four	$\frac{8}{4}$	2	200%
(D)		Two out of four	$\frac{2}{4}$	0.5	50%
(E)		Zero out of four	$\frac{0}{4}$	0	0%
(F)		Three out of four	$\frac{3}{4}$	0.75	75%
(G)		Six out of four	$\frac{6}{4}$	1.5	150%